



**THE JAIN INTERNATIONAL SCHOOL KANPUR**  
**SUMMER VACATION**  
**HOLIDAY HOMEWORK (2024-25)**  
**GRADE: III**

Name: \_\_\_\_\_

<b>ENGLISH</b>	Learn Chapter – Birbal Identifies the Thief • Learn Poem- Are there paws prints in heaven? • Do the given worksheets. • Make a model on ‘Preposition.’ • Do one page daily in English Cursive Writing Book.
<b>HINDI</b>	दिए गए कार्य प्रपत्र को पूर्ण कीजिए। प्रतिदिन एक पेज सुलेख लिखिए। दिए गए विषय (संज्ञा) पर मॉडल बनाइए। पृष्ठ संख्या ६६ (पृथ्वी) कविता याद कीजिए।
<b>MATHS</b>	Do the given sheets & Learn tables from 5 - 15. Projects :- Roll no. 1 & 2 : Make a chart on Addition & Subtraction, Roll no. 3 & 4 : Make a chart on Measurements, Roll no. 5 & 6 : Make a working clock. Roll no. 7 & 8 : Make a working chart on Fractions.
<b>SCIENCE</b>	Learn Ch-2 and 3. Do the given worksheets. Projects- Roll No. 1 & 2: Make a model of a tailor bird or Weaver bird's nest. Roll No. 3 & 4: Make a model of a homemade water purifier. Roll No. 5 & 6: Make a model of food chain. Roll No. 7 & 8: Make a model of a Life cycle of a butterfly.
<b>S.ST.</b>	Do the given worksheets • Roll no 1 to 3- Make a model on Metro Cities of India • Roll no 4 & 5 - Make a chart on Metro Cities of India • Roll no 6 to 8- Make a model on windmill or Smart City
<b>COMPUTER</b>	Roll no. 1 to 3- Make a Model on MS paint. Roll no. 4 and 5- Make a Model on components required to connect to the internet. Roll no. 6 to 8- Make a Model on Hardware and Software. Learn Chapter-1.
<b>G.K.</b>	Roll no. 1 to 3- Make a chart on world currencies. (Ref Chapter- 14) Roll no. 4 and 5- Make a chart on Indian dance forms. (Ref Chapter- 5) Roll no. 6 to 8- Make a chart on Famous Indian Leaders. (Ref Chapter- 15) *Everyone must write 10 current affairs in your G.K. notebook.
<b>Art &amp; Craft</b>	<p><b><u>Art - Draw a fruit basket on drawing sheet and colour it.</u></b></p>  <p><b><u>Craft -Make a pen holder with ice cream sticks.</u></b></p> 







द जैन इंटरनेशनल स्कूल, कानपुर

कक्षा : 3

विषय : हिन्दी

ग्रीष्मावकाश गृहकार्य

1. वर्ग पहली में से शब्द छाँटकर लिखिए तथा उन समूहों में रंग भी भरिए -

सि	पा	ही	ज	प	पी	ती
क	ग	रा	नी	ब	ला	उ
सी	ठी	ज	ढ	ध	ड	जी
टी	ठ	म	ग	र	म	भ
छ	द	क	भ	ती	र	म
ल	क	ड़ी	ज	प	न	घ
क्ष	ली	फ	रे	ल	गा	ड़ी


द जैन इंटरनेशनल स्कूल, कानपुर


कक्षा : 3

विषय : हिन्दी


ग्रीष्मावकाश गृहकार्य

1. चित्र देखकर कहानी पूरी करिए एवं चित्र में रंग भरिए -

एक दिन एक



.....



..... के किनारे टहल रहा था।



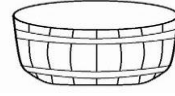
..... को



..... में तैरते देखा। उसने सोचा कि मैं भी तैरूँगा। उसे



..... के नीचे एक

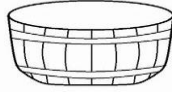


..... दिखाई

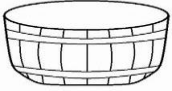
दी।



.....



..... को उठा लाया। उसने



को उल्टा करके



..... में डाला और उछल कर

उसमें बैठ गया।



..... और








..... दोनों साथ - साथ तैरने लगे।

The Jain International School , Kanpur  
 Holiday Homework (2024-25)  
 Subject: Mathematics  
 Class – III

Name: \_\_\_\_\_

Date : \_\_\_\_\_

The animal with the highest score wins the race. Solve the sums and find the winner of the race.

	$12 \xrightarrow{\times 4} \text{ } \xrightarrow{\div 8} \text{ } \xrightarrow{-3} \text{ } \xrightarrow{+6} \text{ }$
	$5 \xrightarrow{+8} \text{ } \xrightarrow{\times 5} \text{ } \xrightarrow{-51} \text{ } \xrightarrow{+9} \text{ }$
	$63 \xrightarrow{\div 9} \text{ } \xrightarrow{\times 7} \text{ } \xrightarrow{+20} \text{ } \xrightarrow{-56} \text{ }$
	$40 \xrightarrow{\div 10} \text{ } \xrightarrow{+8} \text{ } \xrightarrow{\times 4} \text{ } \xrightarrow{-38} \text{ }$
	$25 \xrightarrow{+15} \text{ } \xrightarrow{-26} \text{ } \xrightarrow{\div 7} \text{ } \xrightarrow{\times 8} \text{ }$

.....is the winner.



The Jain International School , Kanpur  
Holiday Homework (2024-25)  
Subject: Mathematics  
Class – III

Name: \_\_\_\_\_

Date : \_\_\_\_\_

Let's write out the five times table using part of a hundred square to help us.

1	2	3	4	5	6	7	8	9	10
11	12	13	14	15	16	17	18	19	20
21	22	23	24	25	26	27	28	29	30
31	32	33	34	35	36	37	38	39	40
41	42	43	44	45	46	47	48	49	50
51	52	53	54	55	56	57	58	59	60

$1 \times 5 =$
$2 \times 5 =$
$3 \times 5 =$
$4 \times 5 =$
$5 \times 5 =$
$6 \times 5 =$
$7 \times 5 =$
$8 \times 5 =$
$9 \times 5 =$
$10 \times 5 =$
$11 \times 5 =$
$12 \times 5 =$

Fill in the missing numbers in the number tracks. Read the numbers out loud as you write them. They are all the five times table.

5		15		25		35		45		55	
30			40			50				60	
5				20						35	
15				30						45	
			40						55		
20						40					

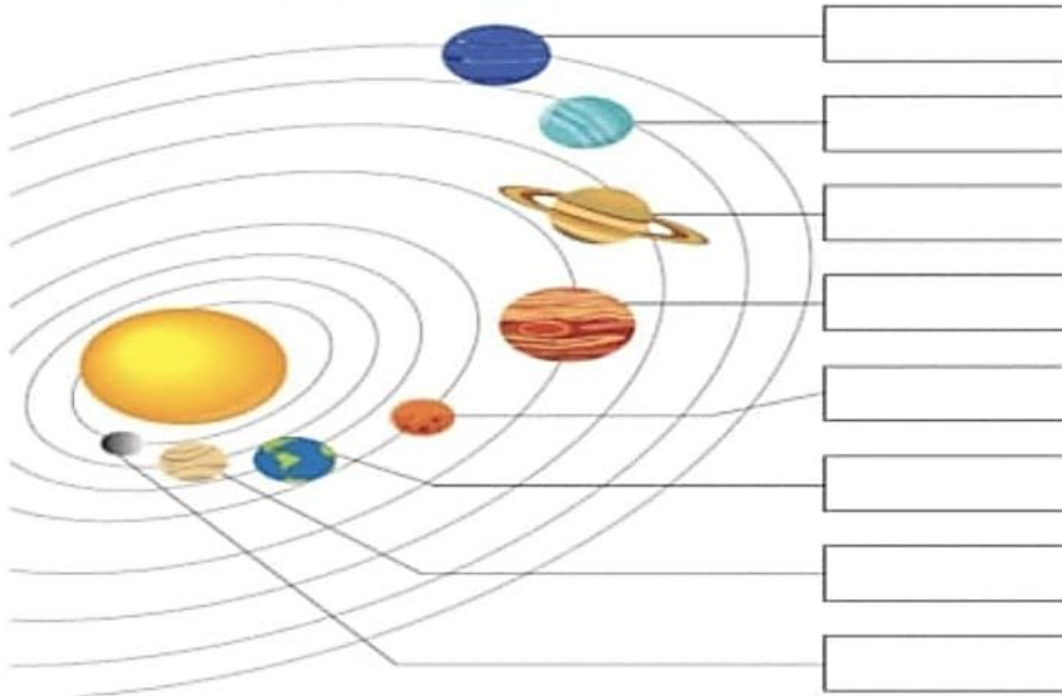


The Jain International School , Kanpur  
Subject: Social Studies  
Holiday Homework Worksheet 1  
Class – III

Name:- \_\_\_\_\_

Date: \_\_\_\_\_

A. Name all the eight planets of the solar system:-



B. Given below are the names of different professions. Sort out the jumbled letters and write them in the given squares.

- HTCREEA      □ □ □ □ □ □ □ □
- ECTPNAERR    □ □ □ □ □ □ □ □ □ □
- ODRCOT        □ □ □ □ □ □ □ □
- TTAEHIRCC    □ □ □ □ □ □ □ □ □ □
- ITPNRAE       □ □ □ □ □ □ □ □
- URPMELB       □ □ □ □ □ □ □ □
- WLYRAE        □ □ □ □ □ □ □ □





The Jain International School , Kanpur  
Subject: Social Studies  
Holiday Homework Worksheet 2  
Class – III

Name:- \_\_\_\_\_

Date: \_\_\_\_\_

Fill in the blanks and paste your photograph in the space provide:-

## My Family



1. My name is \_\_\_\_\_.
2. I'm \_\_\_\_\_ years old.
3. My mother's name is \_\_\_\_\_.
4. My mother is a/an \_\_\_\_\_.
5. My father's name is \_\_\_\_\_.
6. My father is a/an \_\_\_\_\_.
7. My grandmother's name is \_\_\_\_\_.
8. My grandfather's name is \_\_\_\_\_.
9. My sister's name is \_\_\_\_\_.
10. My sister is a/an \_\_\_\_\_.

The Jain International School, Kanpur  
Worksheet  
Subject: Science  
Topic: Housing and Clothing  
Class -III

Name: \_\_\_\_\_

Date: \_\_\_\_\_

Q1-Fill in the blanks:-

- Fibres like nylon and rayon is an example of \_\_\_\_\_ fibres.
- \_\_\_\_\_ fibres are obtained from sheep.
- Houses on the mountains have \_\_\_\_\_ roofs.

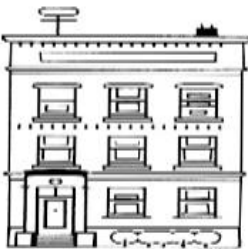
Q2- Choose the correct option:-

- Which of the following is not used to make pucca house?  
a. iron    b. cotton    c. bricks    d. cement
- Which of the following is an example of natural fibre?  
a. jute    b. rayon    c. nylon    d. Both (a) and (b)
- To protect ourselves from rain, we use  
a. hats    b. ropes    c. umbrellas    d. sweaters

Q3- Give two examples for each of the following:-

- Permanent houses- \_\_\_\_\_, \_\_\_\_\_
- Things used to make pucca houses- \_\_\_\_\_, \_\_\_\_\_
- Moveable houses- \_\_\_\_\_, \_\_\_\_\_

Q4- Identify the following types of houses:-



\_\_\_\_\_

\_\_\_\_\_

\_\_\_\_\_

\_\_\_\_\_

The Jain International School, Kanpur

Subject: Science

Worksheet

Name: \_\_\_\_\_ Topic: Air, Water and Weather  
Date: \_\_\_\_\_

Class-III

Q1. Give two examples for each of the following-

- a) Uses of water: \_\_\_\_\_, \_\_\_\_\_
- b) Things present in air: \_\_\_\_\_, \_\_\_\_\_
- c) Seasons: \_\_\_\_\_, \_\_\_\_\_
- d) Things that protect us from rain: \_\_\_\_\_, \_\_\_\_\_
- e) Uses of air: \_\_\_\_\_, \_\_\_\_\_

Q2. Flowers are blooming and trees are full of leaves in Rajat's Garden. What season could this be ?

Ans- \_\_\_\_\_

Q3- We wear light colour clothes on sunny days. Why?

Ans- \_\_\_\_\_  
\_\_\_\_\_

Q4- Identify the following weather symbols:-




\_\_\_\_\_



\_\_\_\_\_



\_\_\_\_\_



\_\_\_\_\_



**The Jain International School, Kanpur**  
**Summer Holiday Homework (2024-25)**

**Class –III**

**Subject: Computer**

**Name:-** \_\_\_\_\_

**Date:** \_\_\_\_\_

**Worksheet 1**

**A. Answer in one word or a sentence:**

1. Name a machine that works on IPO cycle.

\_\_\_\_\_

2. What is the second step in IPO cycle?

\_\_\_\_\_

3. Give an example of output device.

\_\_\_\_\_

4. What does CPU stand for?

\_\_\_\_\_

5. What do you understand by Processing?

\_\_\_\_\_


**B. Tick the correct option.**

1. CPU/Mouse is used to process the data.
2. In IPO cycle, I stand for Incoming/Input.
3. Keyboard is an Input/Output device.
4. In IPO cycle, Process/Input comes before Output.
5. Printer/Microphone is an input device.

**C. Identify the given part of a computer system. Do as directed:**

1. Write its name. ....
2. Colour the Caps Lock key yellow.
3. Encircle the Numeric keypad.
4. Colour the Alphabet keys Blue.
5. Spot the Spacebar key and fill green colour in it.





The Jain International School, Kanpur  
Summer Holiday Homework (2024-25)

Class –III

Subject: Computer

Name:- \_\_\_\_\_

Date: \_\_\_\_\_

**Worksheet 2**

**A. Who am I? Write my name in the space provided.**

1. I help running a computer system during power cut. \_\_\_\_\_
2. I allow the users to open programs stored in a computer. \_\_\_\_\_
3. I am the first screen that appears on the monitor. \_\_\_\_\_
4. Clicking on me shows the Shut down option. \_\_\_\_\_
5. I am the starting up process of a computer. \_\_\_\_\_

**B. Rearrange the following jumbled words.**

1. OBOTNGI \_\_\_\_\_
2. SATKARB \_\_\_\_\_
3. NIWWODS \_\_\_\_\_
4. PUS \_\_\_\_\_
5. WERPO \_\_\_\_\_

**C. Mark the correct order to open Paint program in the figure given below.**

